

SEQUENCES

KS1 – 2001 Paper

1.

14

The numbers in the shaded squares make a sequence.

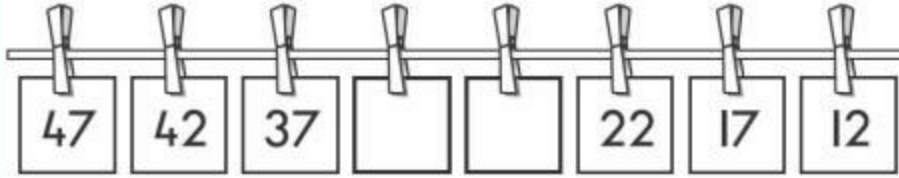
Continue the sequence by shading more squares.

1	2	3	4	5	6	7
8	9	10	11	12	13	14
15	16	17	18	19	20	21
22	23	24	25	26	27	28
29	30	31	32	33	34	35

KS1 – 2002 Paper

2.

17 Write the missing numbers in this sequence.



KS1 – 2003 Paper 1

3.

16 Write the **two** missing numbers in this sequence.

5
9
11
13
17
19

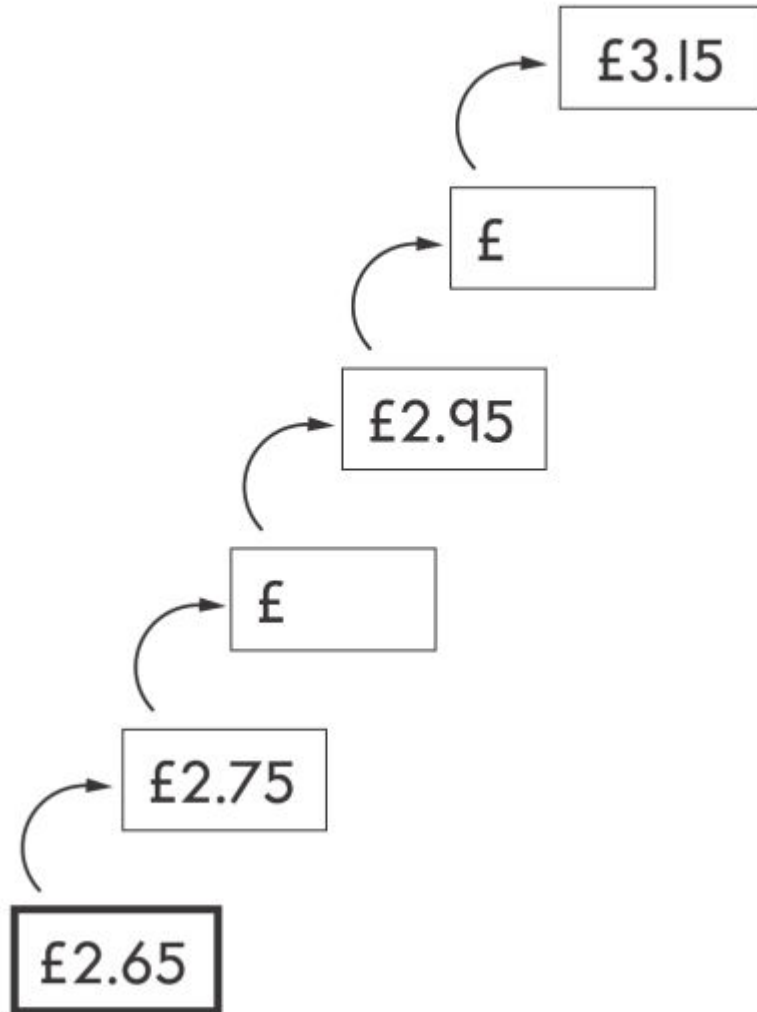


KS1 – 2004 Paper 2

4.

19 Write the missing amounts in this sequence.

The same amount is added each time.

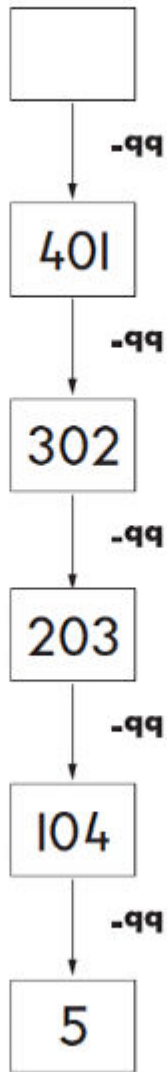


KS1 – 2007 Paper 2

5.

9

Write the missing number in this sequence.



KS1 – 2009 Paper 2

6.

23

Here are the first five numbers in a sequence.

1st	2nd	3rd	4th	5th
420	400	380	360	340

The sequence continues in the same way.

Write the number that will be **10th** in the sequence.

